



# S.S. Divine School



Pre – Primary , Primary, Secondary & Higher Secondary  
Opp.Science City, Sola M : 70693 11011  
E-Mail :ssdivineschool2015@gmail.com

Std : 1 (E.M)  
Sub : Maths

## Unit Test V - December - 2020

Date : 30-12-20  
Mark : 25

### Q-1 Circle the correct options.

[05]

[01] The number name for 17 is \_\_\_\_\_

[A] Seventeen

[B] Saveteen

[C] Seventen

[02] In 45, \_\_\_\_\_ is at tens place.

[A] 4

[B] 5

[C] 9

[03] The numeral for fifty is \_\_\_\_\_ .

[A] 50

[B] 15

[C] 5

[04] 3 tens = \_\_\_\_\_

[A] 3

[B] 30

[C] 39

[05] In 25 and 32, \_\_\_\_\_ is the greater number.

[A] 25

[B] 32

[C] 39

### Q-2 Write number names for the following numerals.

[05]

[01] 23 \_\_\_\_\_

[02] 44 \_\_\_\_\_


[03] 39 \_\_\_\_\_

[04] 50 \_\_\_\_\_

[05] 19 \_\_\_\_\_

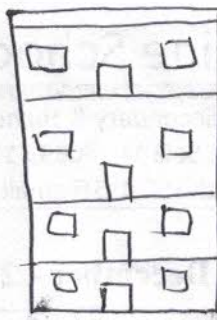
### Q-3 [A] Tick the heaviest object.

[01]




[B] Tick the taller object.

[01]



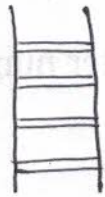
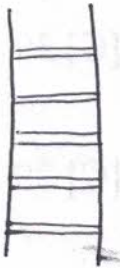
[C] Tick the heavier object.

[01]



[D] Tick the longer object.

[01]



[E] Tick the thinner object.

[01]



Q-4 Write the succeeding the preceding and the middle number.

[05]

[01] 34, 35, \_\_\_\_\_, 37

[02] 39, 40, 41, \_\_\_\_\_

[03] \_\_\_\_\_, 24, 25, 26

[04] 10, \_\_\_\_\_, 12, 13

[05] 21, 22, \_\_\_\_\_, 24

**Q-5 Match the following.**

[05]

**A**

**B**

[01] 3 tens, 5 ones

[a] 43

[02] 4 tens, 9 one

[b] 50

[03] 40 + 3

[c] 49

[04] 2 tens 1 one

[d] 35

[04] 5 tens

[e] 21

[1 - ]

[2 - ]

[3 - ]

[4 - ]

[5 - ]

[03] The number for fifty is

[A] 50

[B] 15

[C] 3

[04] 3 tens +

[A] 3

[B] 30

[C] 39

[05] In 25 and 32,

[A] 2 >

[B] 3 >

[C] 2 <

**Q-2 Write number names for the following numerals.**

[05]

[01] 23 \_\_\_\_\_

[02] 44 \_\_\_\_\_

[03] 39 \_\_\_\_\_

[04] 50 \_\_\_\_\_

[05] 19 \_\_\_\_\_

**Q-3 Tick the heaviest object.**

[01]

